

Please check the examination details below before entering your candidate information

Candidate surname	Other names		
Centre Number	Candidate Number		
<input style="width: 25px; height: 25px;" type="text"/> <input style="width: 25px; height: 25px;" type="text"/> <input style="width: 25px; height: 25px;" type="text"/> <input style="width: 25px; height: 25px;" type="text"/>	<input style="width: 25px; height: 25px;" type="text"/> <input style="width: 25px; height: 25px;" type="text"/> <input style="width: 25px; height: 25px;" type="text"/> <input style="width: 25px; height: 25px;" type="text"/>		
Pearson Edexcel International Advanced Level			
Wednesday 11 October 2023			
Afternoon (Time: 1 hour 45 minutes)	<table border="1" style="width: 100%; border-collapse: collapse;"> <tr> <td style="padding: 5px;">Paper reference</td> <td style="padding: 5px; font-size: 1.5em; font-weight: bold;">WEC11/01</td> </tr> </table>	Paper reference	WEC11/01
Paper reference	WEC11/01		
<div style="border: 1px solid black; padding: 10px;"> <p style="font-size: 1.5em; font-weight: bold; margin: 0;">Economics</p> <p style="font-weight: bold; margin: 0;">International Advanced Subsidiary</p> <p style="font-weight: bold; margin: 0;">UNIT 1: Markets in Action</p> </div>			
You must have: Source Booklet (enclosed)	Total Marks <input style="width: 80px; height: 40px;" type="text"/>		

Instructions

- Use **black** ink or ball-point pen.
- **Fill in the boxes** at the top of this page with your name, centre number and candidate number.
- Answer **ALL** questions in Sections A, B and C.
- Answer **ONE** question in Section D.
- Answer the questions in the spaces provided
– *there may be more space than you need.*

Information

- The total mark for this paper is 80.
- The marks for **each** question are shown in brackets
– *use this as a guide as to how much time to spend on each question.*
- Calculators may be used.

Advice

- Read each question **carefully** before you start to answer it.
- Check your answers if you have time at the end.

Turn over ►

P75610A

©2023 Pearson Education Ltd.
Z:1/1/1/




Pearson

SECTION A

Answer **ALL** questions in this section.

Questions must be answered with a cross in a box . If you change your mind about an answer, put a line through the box and then mark your new answer with a cross .

1 Which **one** of the following is an example of government failure?

- A** Market forces eliminating excess supply of a product by enabling its price to fall
- B** A market bubble emerging in the value of shares on the stock exchange
- C** The introduction of a tax that causes a decrease in external costs
- D** The introduction of a tax that causes an increase in smuggling

(Total for Question 1 = 1 mark)

2 The table shows the maximum production possibilities for a country in 2021 and 2022.

Year	Consumer goods		Capital goods
2021	220	OR	105
2022	195	OR	96

Which **one** of the following might have caused this change in the country's production possibilities?

- A** A natural disaster
- B** A rise in the rate of unemployment
- C** An improvement in technology
- D** An increase in the number of immigrants

(Total for Question 2 = 1 mark)

DO NOT WRITE IN THIS AREA

DO NOT WRITE IN THIS AREA

DO NOT WRITE IN THIS AREA



DO NOT WRITE IN THIS AREA

DO NOT WRITE IN THIS AREA

DO NOT WRITE IN THIS AREA

- 3 The table shows the estimated price elasticity of demand for different car types in Norway.

Car type	Price elasticity of demand
Diesel	-0.99
Petrol	-1.08
Electric	-1.27

Which **one** of the following can be deduced from the table?

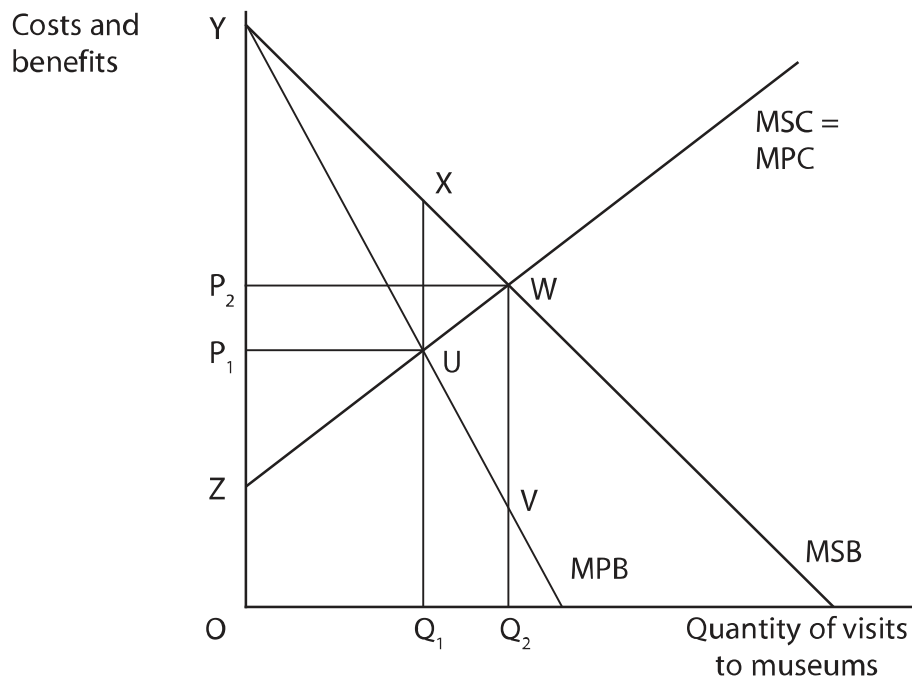
- A Demand for all three car types is price inelastic
- B Demand for all three car types is price elastic
- C An increase in the price of diesel cars will result in an increase in the total revenue for diesel car manufacturers
- D An increase in the price of electric cars will result in an increase in the total revenue for electric car manufacturers

(Total for Question 3 = 1 mark)



P 7 5 6 1 0 A 0 3 2 8

4 The diagram shows the market for museum visits in Spain.



Which **one** of the following can be deduced from this diagram?

- A The market equilibrium quantity is at Q_2
- B The social optimum quantity is at Q_1
- C The welfare gain area would be equal to UWV
- D The welfare gain area would be equal to UWX

(Total for Question 4 = 1 mark)

DO NOT WRITE IN THIS AREA

DO NOT WRITE IN THIS AREA

DO NOT WRITE IN THIS AREA



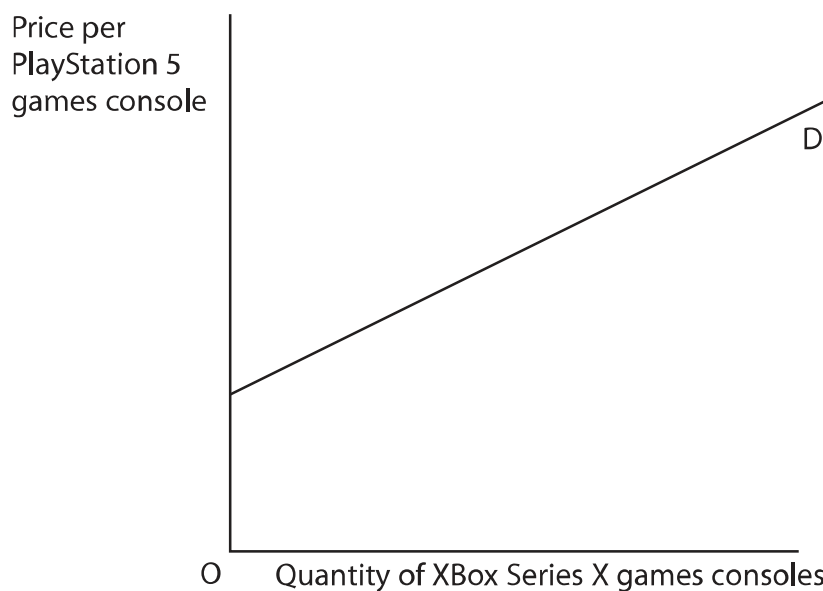
- 5 Before the global financial crisis of 2008, commercial banks expected that their governments would not allow them to fail because of the threats to the rest of the economy. This meant that some staff at banks took excessive risks when lending and investing.

Which **one** of the following concepts best describes the behaviour of staff at these banks?

- A Inertia
- B The free-rider problem
- C Moral hazard
- D Market bubble

(Total for Question 5 = 1 mark)

- 6 The diagram illustrates the relationship between the price of PlayStation 5 games consoles and the quantity demanded of Xbox Series X games consoles.



Which **one** of the following can be deduced from the diagram about the relationship between PlayStation 5 games consoles and Xbox Series X games consoles?

- A They are substitutes
- B They are complements
- C They are unrelated goods
- D They are inferior goods

(Total for Question 6 = 1 mark)

TOTAL FOR SECTION A = 6 MARKS

DO NOT WRITE IN THIS AREA

DO NOT WRITE IN THIS AREA

DO NOT WRITE IN THIS AREA

BLANK PAGE



P 7 5 6 1 0 A 0 1 1 2 8

SECTION C

Study Figure 1 and Extracts A, B and C in the Source Booklet before answering Question 12.

Write your answers in the space provided on the following pages.

- 12 (a) Define the term 'tradeable pollution permit scheme'. (Extract B, line 16) (2)
- (b) With reference to Extract B, explain whether the supply of phosphate rock is likely to be price elastic or price inelastic. (4)
- (c) With reference to Figure 1 and Extract A, analyse **one** demand factor *and one* supply factor that caused the price of fertiliser to increase between January 2021 and April 2022. (6)
- Illustrate your answer with a supply and demand diagram. (8)
- (d) With reference to Extract C, examine **two** likely effects of the subsidies paid by Canada's Government to farmers who use more organic farming methods. (8)
- (e) With reference to Extract B, discuss the external costs associated with the production and the use of fertiliser. (14)
- Illustrate your answer with an appropriate diagram.

DO NOT WRITE IN THIS AREA

DO NOT WRITE IN THIS AREA

DO NOT WRITE IN THIS AREA



(c) With reference to Figure 1 and Extract A, analyse **one** demand factor *and* **one** supply factor that caused the price of fertiliser to increase between January 2021 and April 2022.

Illustrate your answer with a supply and demand diagram.

(6)

Area for drawing a supply and demand diagram, consisting of multiple horizontal dotted lines.

DO NOT WRITE IN THIS AREA

DO NOT WRITE IN THIS AREA

DO NOT WRITE IN THIS AREA



DO NOT WRITE IN THIS AREA

DO NOT WRITE IN THIS AREA

DO NOT WRITE IN THIS AREA

Large writing area with horizontal dotted lines.



P 7 5 6 1 0 A 0 1 5 2 8

(d) With reference to Extract C, examine **two** likely effects of the subsidies paid by Canada's Government to farmers who use more organic farming methods.

(8)

Area with horizontal dotted lines for writing the answer.

DO NOT WRITE IN THIS AREA

DO NOT WRITE IN THIS AREA

DO NOT WRITE IN THIS AREA



DO NOT WRITE IN THIS AREA

DO NOT WRITE IN THIS AREA

DO NOT WRITE IN THIS AREA

Main writing area with horizontal lines.



P 7 5 6 1 0 A 0 1 7 2 8

(e) With reference to Extract B, discuss the external costs associated with the production and the use of fertiliser.

Illustrate your answer with an appropriate diagram.

(14)

Area with horizontal dotted lines for writing the answer.

DO NOT WRITE IN THIS AREA

DO NOT WRITE IN THIS AREA

DO NOT WRITE IN THIS AREA



DO NOT WRITE IN THIS AREA

DO NOT WRITE IN THIS AREA

DO NOT WRITE IN THIS AREA

Main writing area with horizontal lines.



P 7 5 6 1 0 A 0 1 9 2 8

DO NOT WRITE IN THIS AREA

DO NOT WRITE IN THIS AREA

DO NOT WRITE IN THIS AREA

(Total for Question 12 = 34 marks)

TOTAL FOR SECTION C = 34 MARKS



DO NOT WRITE IN THIS AREA

DO NOT WRITE IN THIS AREA

DO NOT WRITE IN THIS AREA

BLANK PAGE



P 7 5 6 1 0 A 0 2 1 2 8

SECTION D

Answer ONE question from this section.

Write your answer in the space provided.

EITHER

13 In the UK the maximum price for a unit of electricity for domestic consumers was £0.28 per kilowatt hour in September 2022. This was increased by the Government to £0.34 per kilowatt hour in October 2022.

Evaluate the microeconomic effects of an increase in the maximum price of electricity.

(Total for Question 13 = 20 marks)

OR

14 Many consumers do not buy travel insurance before going on holiday abroad, despite the likely substantial costs if they need medical care. Many car drivers do not provide complete and accurate information to car insurance companies when insuring their cars.

Evaluate the microeconomic effects of imperfect information on insurance markets.

(Total for Question 14 = 20 marks)

Indicate which question you are answering by marking a cross . If you change your mind, put a line through the box and then indicate your new question with a cross .

Chosen question number: **Question 13** **Question 14**

Write your answer here:

.....
.....
.....
.....
.....
.....
.....
.....
.....
.....
.....

DO NOT WRITE IN THIS AREA

DO NOT WRITE IN THIS AREA

DO NOT WRITE IN THIS AREA



DO NOT WRITE IN THIS AREA

DO NOT WRITE IN THIS AREA

DO NOT WRITE IN THIS AREA

Main writing area with horizontal lines.



P 7 5 6 1 0 A 0 2 3 2 8

Handwriting practice area with 20 sets of horizontal lines. Each set consists of a solid top line, a dashed middle line, and a solid bottom line.

DO NOT WRITE IN THIS AREA

DO NOT WRITE IN THIS AREA

DO NOT WRITE IN THIS AREA



DO NOT WRITE IN THIS AREA

DO NOT WRITE IN THIS AREA

DO NOT WRITE IN THIS AREA

Main writing area with horizontal lines.



P 7 5 6 1 0 A 0 2 5 2 8

Handwriting practice area with 20 sets of horizontal lines.

DO NOT WRITE IN THIS AREA

DO NOT WRITE IN THIS AREA

DO NOT WRITE IN THIS AREA



DO NOT WRITE IN THIS AREA

DO NOT WRITE IN THIS AREA

DO NOT WRITE IN THIS AREA

Handwriting practice area with 20 sets of horizontal dotted lines.

TOTAL FOR SECTION D = 20 MARKS

TOTAL FOR PAPER = 80 MARKS



P 7 5 6 1 0 A 0 2 7 2 8

DO NOT WRITE IN THIS AREA

DO NOT WRITE IN THIS AREA

DO NOT WRITE IN THIS AREA

BLANK PAGE



Pearson Edexcel International Advanced Level

Wednesday 11 October 2023

Afternoon (Time: 1 hour 45 minutes)

Paper
reference

WEC11/01

Economics

International Advanced Subsidiary

UNIT 1: Markets in Action

Source Booklet

Do not return this Booklet with the question paper.

Turn over ►

P75610A

©2023 Pearson Education Ltd.
Z:1/1/1/

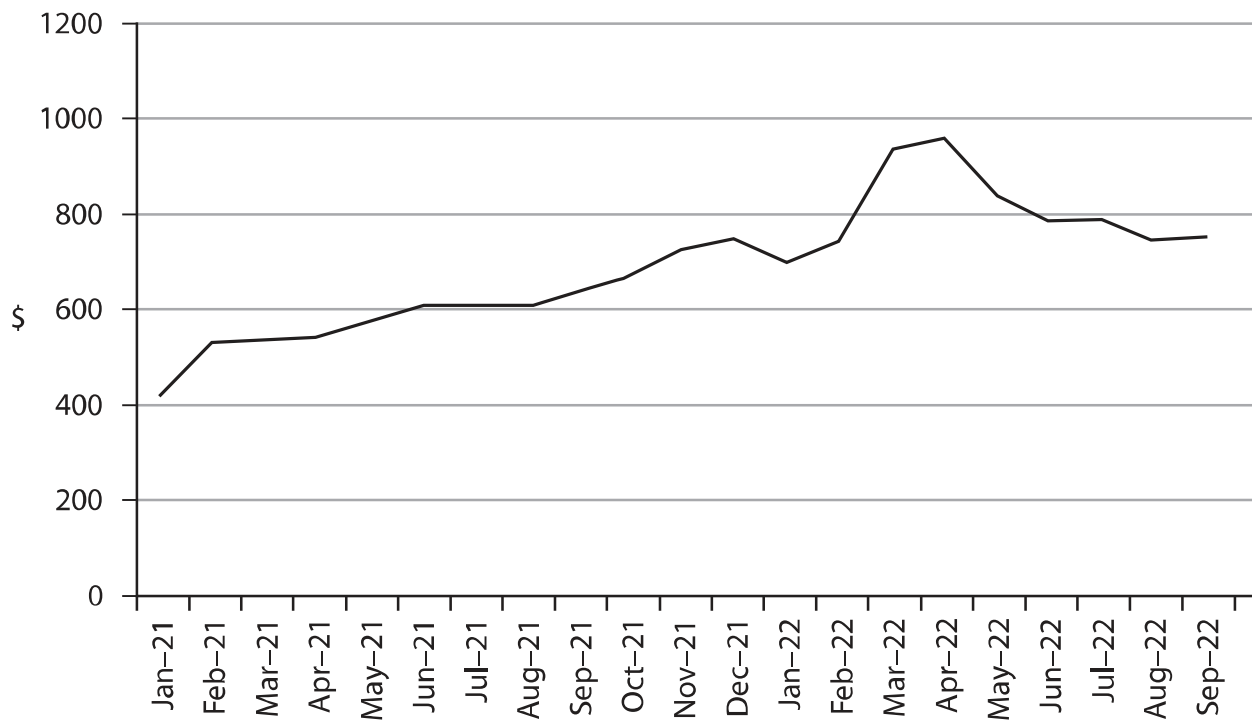


Pearson

Sources for use with Section C

The market for fertiliser

Figure 1 World price of fertiliser, \$ per tonne, January 2021 to September 2022

**Extract A Demand and supply**

Higher crop prices in 2021 provided an incentive for farmers to increase the quantity of crops that they grew. As a result, the demand for fertiliser increased by 6.3% compared with 2020.

Another reason for the increase in demand for fertiliser was that governments paid subsidies to farmers during the global health crisis. These subsidies encouraged farmers to grow more crops. 5

Poor weather caused some factories that manufacture fertiliser to shut down for several weeks. For example, winter storms and Hurricane Ida disrupted production in the USA. Costs of production also rose as a result of a significant increase in the world price of gas. 10

Extract B Fertiliser production and its use

Between 1960 and 2019 there was a ten-fold increase in the use of fertiliser by farmers to increase agricultural output. Over the same period crop production increased four-fold. Fertiliser is produced by applying acids to phosphate rock. Phosphate rock is a finite resource and the amount available is decreasing. In addition, the production of fertiliser requires the substantial use of non-renewable resources such as gas and coal. This results in greenhouse gas emissions. Consequently, fertiliser production is responsible for 1% of total global energy use and 1.4% of total carbon emissions. 5

The fertilisers that are used on farmland are often washed into rivers and lakes. This causes algae to develop and oxygen levels to decrease, resulting in a decline in fish stocks. 10

85% of the world's supply of phosphate rock comes from just five countries. Morocco produces 70% of total production.

France and Germany are the largest fertiliser manufacturers in the European Union. The European Union's tradeable pollution permit scheme applies to fertiliser manufacturers in these countries. 15

Extract C Subsidies in Canada

Since 1990 the production and use of fertilisers have accounted for approximately 10% of Canada's greenhouse gas emissions. To reach its 2030 greenhouse gas emissions target, Canada needs to reduce its use of fertiliser. Canada's Government is providing subsidies of CA\$ 750 million to farmers over 10 years to use more organic farming methods to achieve this target. 5



Acknowledgements

Figure 1 adapted from:

<https://www.indexmundi.com/commodities/?commodity=dap-fertilizer&months=60>

Extract A adapted from:

<https://www.fertilizer.org/news/why-are-fertilizer-prices-so-high/>

<https://www.theguardian.com/business/2022/mar/08/surge-in-fertiliser-prices-adds-to-pressure-on-uk-farmers>

Extract B adapted from:

<https://www.carbonbrief.org/qa-what-does-the-worlds-reliance-on-fertilisers-mean-for-climate-change/#:~:text=The%20global%20production%20of%20fertilisers,non-CO2%20greenhouse%20gas%20emissions.>

Extract C adapted from:

'Government seeks guidance on path towards reducing emissions associated with fertiliser', Agriculture and Agri-Food Canada, 3 April 2022, <https://www.canada.ca/en/agriculture-agri-food/news/2022/03/government-seeks-guidance-on-path-towards-reducing-emissions-associated-with-fertilizer.html>