

Please check the examination details below before entering your candidate information

Candidate surname

Other names

Centre Number

Candidate Number

Pearson Edexcel International Advanced Level

Thursday 11 January 2024

Afternoon (Time: 1 hour 30 minutes)

Paper
reference

WPH11/01

Physics

International Advanced Subsidiary/Advanced Level

UNIT 1: Mechanics and Materials

You must have:

Scientific calculator, ruler

Total Marks

Instructions

- Use **black** ink or ball-point pen.
- If pencil is used for diagrams/sketches/graphs it must be dark (HB or B).
- **Fill in the boxes** at the top of this page with your name, centre number and candidate number.
- Answer **all** questions.
- Answer the questions in the spaces provided
– *there may be more space than you need.*
- **Show all your working out** in calculations and **include units** where appropriate.

Information

- The total mark for this paper is 80.
- The marks for **each** question are shown in brackets
– *use this as a guide as to how much time to spend on each question.*
- In the question marked with an **asterisk (*)**, marks will be awarded for your ability to structure your answer logically, showing how the points that you make are related or follow on from each other where appropriate.
- The list of data, formulae and relationships is printed at the end of this booklet.

Advice

- Read each question carefully before you start to answer it.
- Try to answer every question.
- Check your answers if you have time at the end.

Turn over ►

P75596A

©2024 Pearson Education Ltd.
S:1/1/1/



Pearson

SECTION A

Answer ALL questions.

For questions 1–10, in Section A, select one answer from A to D and put a cross in the box ☒. If you change your mind, put a line through the box ☒ and then mark your new answer with a cross ☒.

1 Which of the following is an SI unit for stress?

- A kg m^{-2}
- B $\text{m}^2 \text{kg}^{-2}$
- C $\text{m}^2 \text{N}^{-1}$
- D Nm^{-2}

(Total for Question 1 = 1 mark)

2 Which row of the table only contains vector quantities?

<input type="checkbox"/> A	acceleration	momentum	weight
<input type="checkbox"/> B	density	time	work done
<input type="checkbox"/> C	displacement	mass	velocity
<input type="checkbox"/> D	force	kinetic energy	temperature

(Total for Question 2 = 1 mark)

3 A spring is stretched by applying a force of 3.0 N. The elastic strain energy stored by the spring is 0.04 J.

Which of the following expressions gives the extension, in m, of the spring?

- A $\frac{2 \times 0.04}{3.0}$
- B $\sqrt{\frac{2 \times 0.04}{3.0}}$
- C $\sqrt{\frac{3.0}{2 \times 0.04}}$
- D $\frac{3.0}{2 \times 0.04}$

(Total for Question 3 = 1 mark)



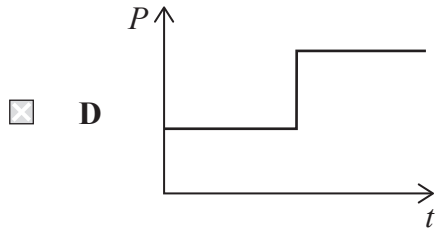
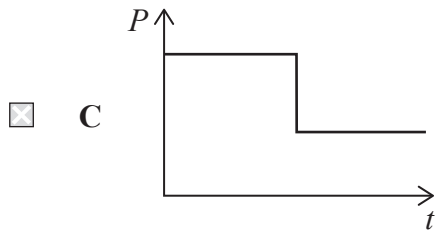
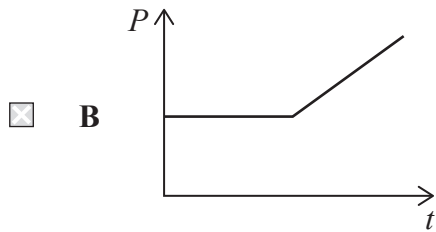
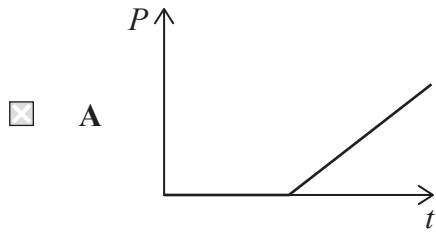
DO NOT WRITE IN THIS AREA

DO NOT WRITE IN THIS AREA

DO NOT WRITE IN THIS AREA

4 A cyclist moves along a horizontal road at a constant speed. She then moves at the same speed up a hill with a constant gradient.

Which of the following graphs shows how the power output P of the cyclist varies with time t ?



(Total for Question 4 = 1 mark)



P 7 5 5 9 6 A 0 3 3 2

- 5 A student dropped a table tennis ball. The ball fell for time t and had velocity v just before it hit the ground.

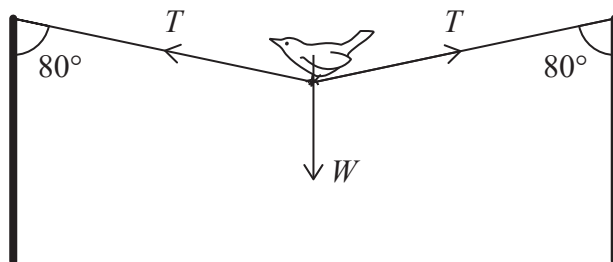
The student used the equations of motion to calculate t and v . These equations ignore air resistance.

Which row of the table shows how the actual values compared with the student's calculated values for t and v ?

	t	v
<input type="checkbox"/> A	Less than calculated	Less than calculated
<input type="checkbox"/> B	Less than calculated	Greater than calculated
<input type="checkbox"/> C	Greater than calculated	Less than calculated
<input type="checkbox"/> D	Greater than calculated	Greater than calculated

(Total for Question 5 = 1 mark)

- 6 A length of string is attached between two vertical posts. A bird of weight W stands on the middle of the string causing tension T in the string. The string makes an angle of 80° with each post, as shown.



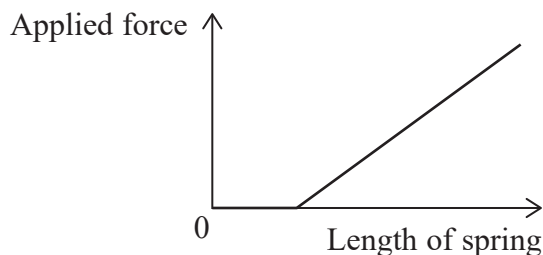
Which of the following expressions is correct?

- A $T = \frac{W}{2 \sin 80^\circ}$
- B $T = W \times 2 \sin 80^\circ$
- C $T = \frac{W}{2 \cos 80^\circ}$
- D $T = W \times 2 \cos 80^\circ$

(Total for Question 6 = 1 mark)



- 7 A force is applied to stretch a spring. The graph shows how the length of the spring varies with the applied force.



Which of the following gives the stiffness of the spring?

- A the area between the graph and the x -axis
- B the area between the graph and the y -axis
- C the gradient of the graph
- D $\frac{1}{\text{gradient of the graph}}$

(Total for Question 7 = 1 mark)

- 8 A solid cube of weight W is made from material with density ρ .

Which expression gives the length of each side of the cube?

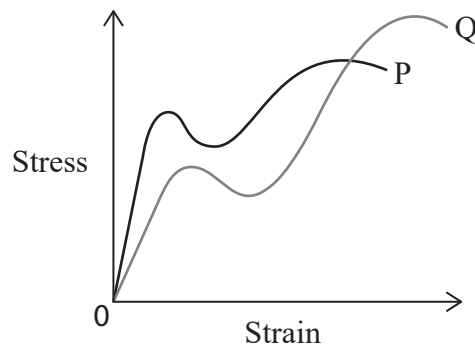
- A $\left(\frac{\rho g}{W}\right)^3$
- B $\sqrt[3]{\frac{\rho g}{W}}$
- C $\left(\frac{W}{\rho g}\right)^3$
- D $\sqrt[3]{\frac{W}{\rho g}}$

(Total for Question 8 = 1 mark)



- 9 A force is applied to stretch two wires, P and Q, until the wires break. Each wire is made of a different metal.

The stress-strain graph for each wire is shown.



Which of the following statements is correct?

- A P has a greater breaking stress than Q.
- B P has a greater breaking strain than Q.
- C P has a greater yield stress than Q.
- D P has a lower Young modulus than Q.

(Total for Question 9 = 1 mark)

DO NOT WRITE IN THIS AREA

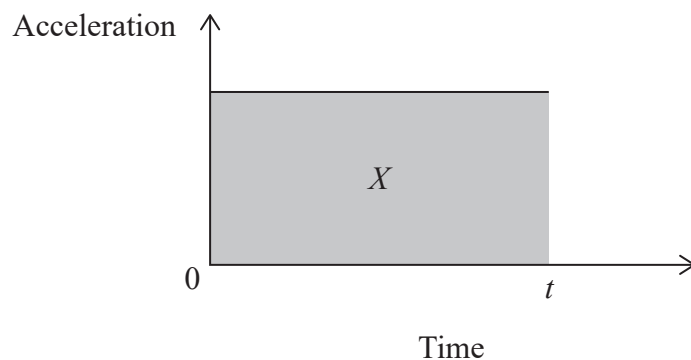
DO NOT WRITE IN THIS AREA

DO NOT WRITE IN THIS AREA



10 An object moves from rest with uniform acceleration for time t .

The acceleration-time graph for the object is shown. X is the area under the graph between time 0 and time t .



Which of the following expressions gives the distance moved by the object?

- A X
- B $\frac{X}{2}$
- C Xt
- D $\frac{Xt}{2}$

(Total for Question 10 = 1 mark)

TOTAL FOR SECTION A = 10 MARKS



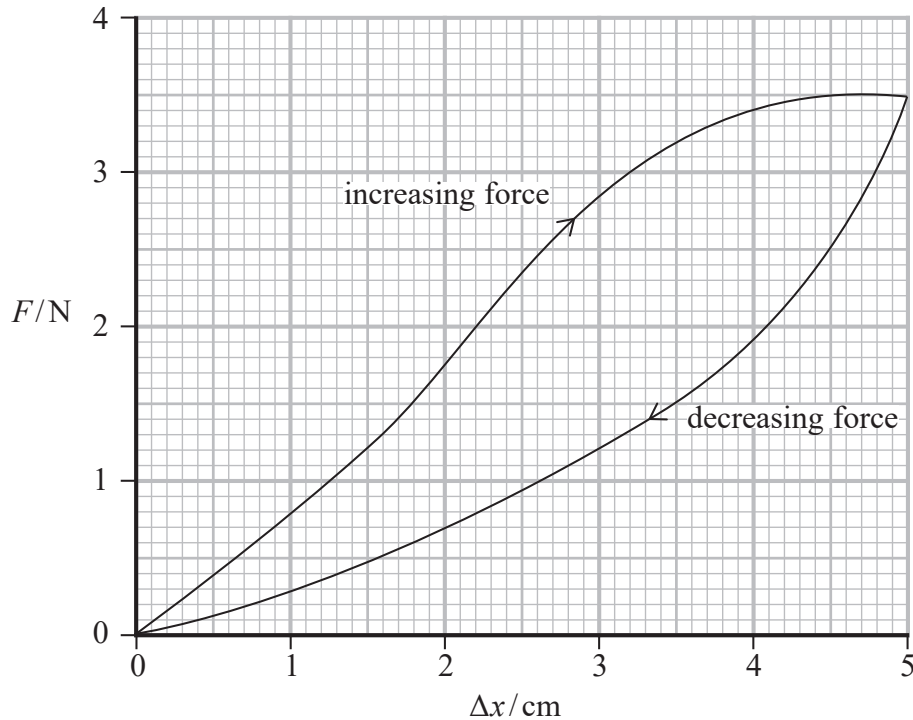
P 7 5 5 9 6 A 0 7 3 2

SECTION B

Answer ALL questions in the spaces provided.

- 11 A student applied a force F to a rubber band. The student measured the corresponding extension, Δx , as F was increased and then decreased.

The graph shows how Δx varied as F was increased and then decreased.



- (a) State how the graph shows that the rubber band deformed elastically.


(1)

.....

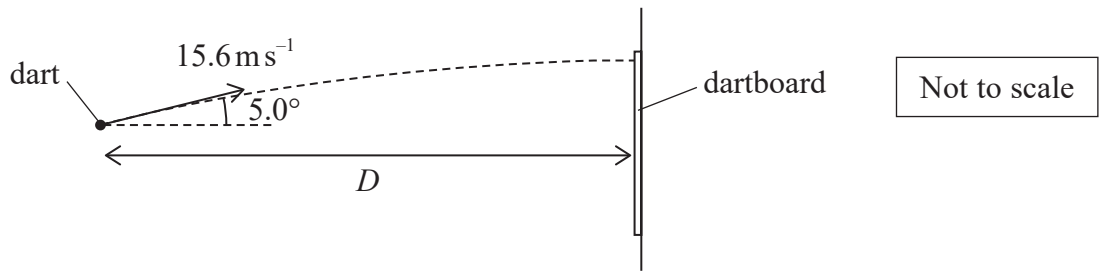
.....



12 In a game called Darts, metal darts are thrown towards a dartboard. The darts hit the dartboard as shown.



A dart is thrown with a velocity of 15.6 m s^{-1} at an angle of 5.0° to the horizontal. The dart travels a horizontal distance D to the dartboard, as shown.



Just before the dart hits the dartboard, the vertical component of the velocity of the dart is zero.

The air resistance acting on the dart is negligible.

(a) Show that the time taken for the dart to reach the dartboard is about 0.14 s.

(3)

.....

.....

.....

.....

.....

.....

.....

DO NOT WRITE IN THIS AREA

DO NOT WRITE IN THIS AREA

DO NOT WRITE IN THIS AREA



(b) Calculate the horizontal distance D travelled by the dart.

(2)

$D =$

(Total for Question 12 = 5 marks)

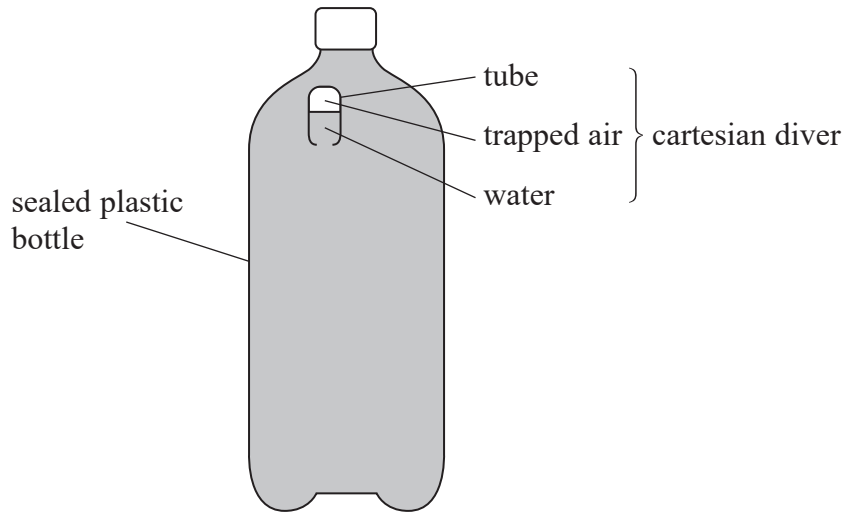
DO NOT WRITE IN THIS AREA



P 7 5 5 9 6 A 0 1 1 3 2

13 A student has a toy called a 'cartesian diver' inside a sealed plastic bottle of water.

The cartesian diver consists of a tube closed at one end. Air is trapped by water inside the tube, as shown.



The student squeezes the bottle. More water is forced into the tube, and the volume of the trapped air decreases.

Explain why the cartesian diver accelerates downwards.

.....

.....

.....

.....

.....

.....

.....

(Total for Question 13 = 3 marks)

DO NOT WRITE IN THIS AREA

DO NOT WRITE IN THIS AREA

DO NOT WRITE IN THIS AREA



DO NOT WRITE IN THIS AREA

DO NOT WRITE IN THIS AREA

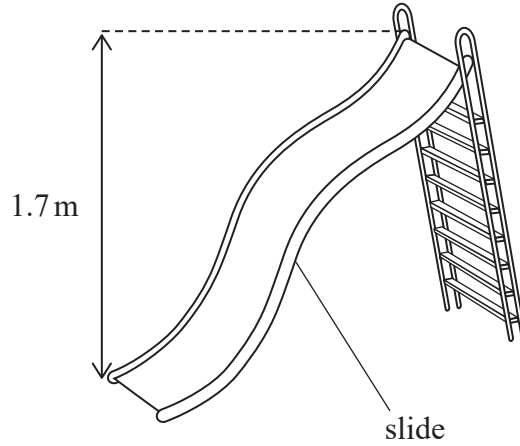
DO NOT WRITE IN THIS AREA

BLANK PAGE



P 7 5 5 9 6 A 0 1 3 3 2

14 A child's slide has a vertical height of 1.7 m as shown.



(a) A child starts from rest at the top of the slide and moves down the slide. The resistive forces acting on the child can be ignored.

(i) Explain why the equations of motion should **not** be used to determine the maximum speed of the child.

You should consider the shape of the slide.

(3)

.....

.....

.....

.....

.....

.....

(ii) The child has a mass of 24 kg.

Determine the maximum speed v of the child on the slide.

(3)

.....

.....

.....

.....

.....

$v =$

DO NOT WRITE IN THIS AREA

DO NOT WRITE IN THIS AREA

DO NOT WRITE IN THIS AREA

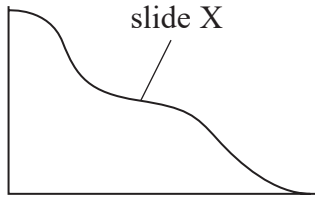


DO NOT WRITE IN THIS AREA

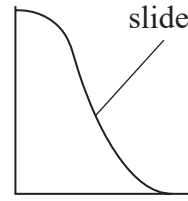
DO NOT WRITE IN THIS AREA

DO NOT WRITE IN THIS AREA

- (b) Two slides, X and Y, have the same height. Slide X is longer than slide Y, as shown.



slide X



slide Y

A child moves from rest down slide X and reaches a maximum speed v_X .

A second child moves from rest down slide Y and reaches a maximum speed v_Y .

The child on slide Y has a greater mass than the child on slide X.

The resistive forces acting on both children can be ignored.

Explain how v_X compares with v_Y .

(3)

.....

.....

.....

.....

.....

.....

.....

(Total for Question 14 = 9 marks)



P 7 5 5 9 6 A 0 1 5 3 2

15 A student investigated small ball-bearings falling through a liquid to determine the viscosity of the liquid.

(a) State the conditions needed for Stokes' law to apply to this investigation.

(2)

.....

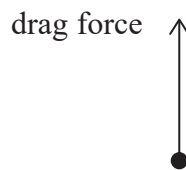
.....

.....

.....

(b) (i) Complete the free-body force diagram for a ball-bearing when falling at terminal velocity.

(2)



DO NOT WRITE IN THIS AREA

DO NOT WRITE IN THIS AREA

DO NOT WRITE IN THIS AREA



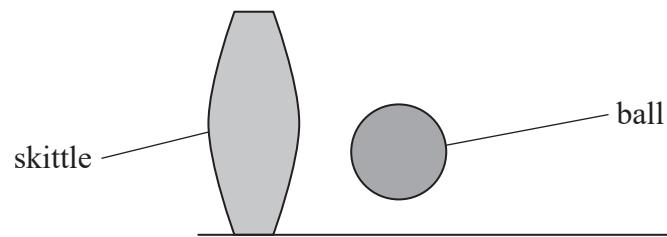
16 A skittle is a wooden object that can stand upright on one end.

In a game of Skittles, a ball is thrown at some skittles to knock them over, as shown.

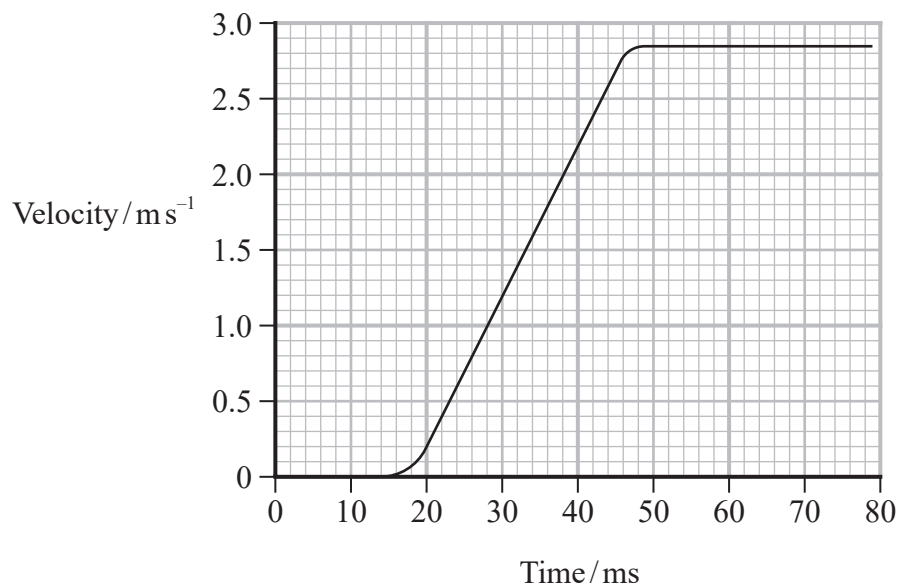


(Source: © CMBiles/Getty Images)

The diagram below shows the ball just before it collides with a skittle.



(a) The graph shows how the velocity of the skittle varies with time. The time shown on the graph starts just before the ball hits the skittle.



DO NOT WRITE IN THIS AREA

DO NOT WRITE IN THIS AREA

DO NOT WRITE IN THIS AREA

(c) The ball is thrown again, and collides with another stationary skittle.

During the collision the horizontal velocity of the ball changes from 7.2 ms^{-1} to 1.6 ms^{-1} .

The horizontal velocity of the skittle immediately after the collision is 3.1 ms^{-1} in the same direction as the ball.

Determine the mass of the ball.

mass of skittle = 1.4 kg

(3)

Mass of ball =

(Total for Question 16 = 12 marks)



DO NOT WRITE IN THIS AREA

DO NOT WRITE IN THIS AREA

DO NOT WRITE IN THIS AREA

BLANK PAGE



P 7 5 5 9 6 A 0 2 1 3 2

17 A student determined the Young modulus of a material in the form of a wire.

(a) The student used a micrometer to measure the diameter of the wire.

Describe how the student should

- check that the wire is uniform
- check that the wire has a circular cross-section.

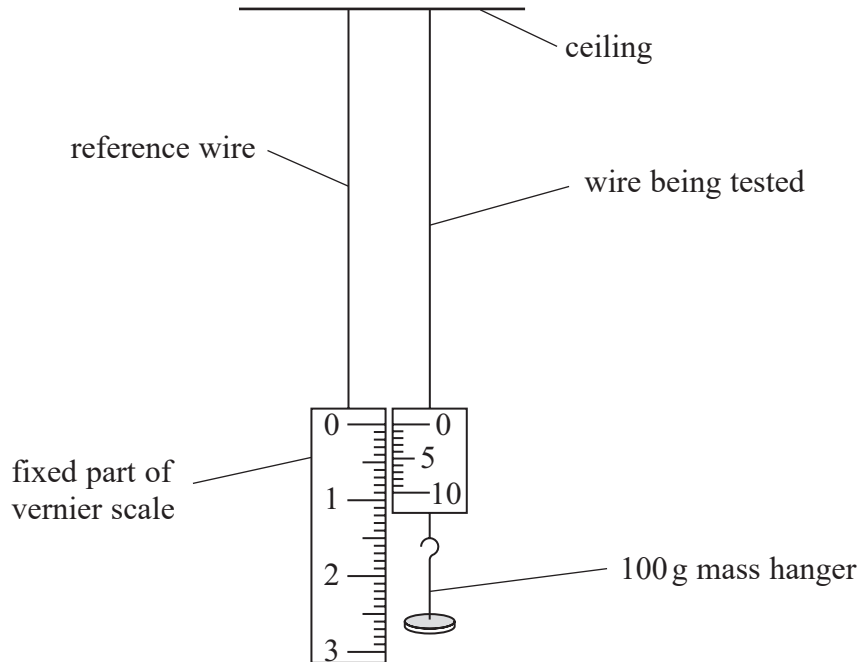
(2)

(b) The student hung a reference wire and the wire being tested from the ceiling.

At the lower end of the reference wire he positioned the fixed part of a vernier scale.

The student attached a 100 g mass hanger to the wire being tested. The initial reading on the vernier scale was 0.0 mm, as shown.

He added masses to the mass hanger and measured the corresponding extension Δx of the wire using the vernier scale.



- (i) The student kept his feet away from the apparatus so that the masses could not fall on his feet.

Explain one other safety precaution.

(2)

- (ii) Each time the student added more mass, Δx increased by a few mm.

Explain why he should measure Δx using a vernier scale, instead of a metre rule.

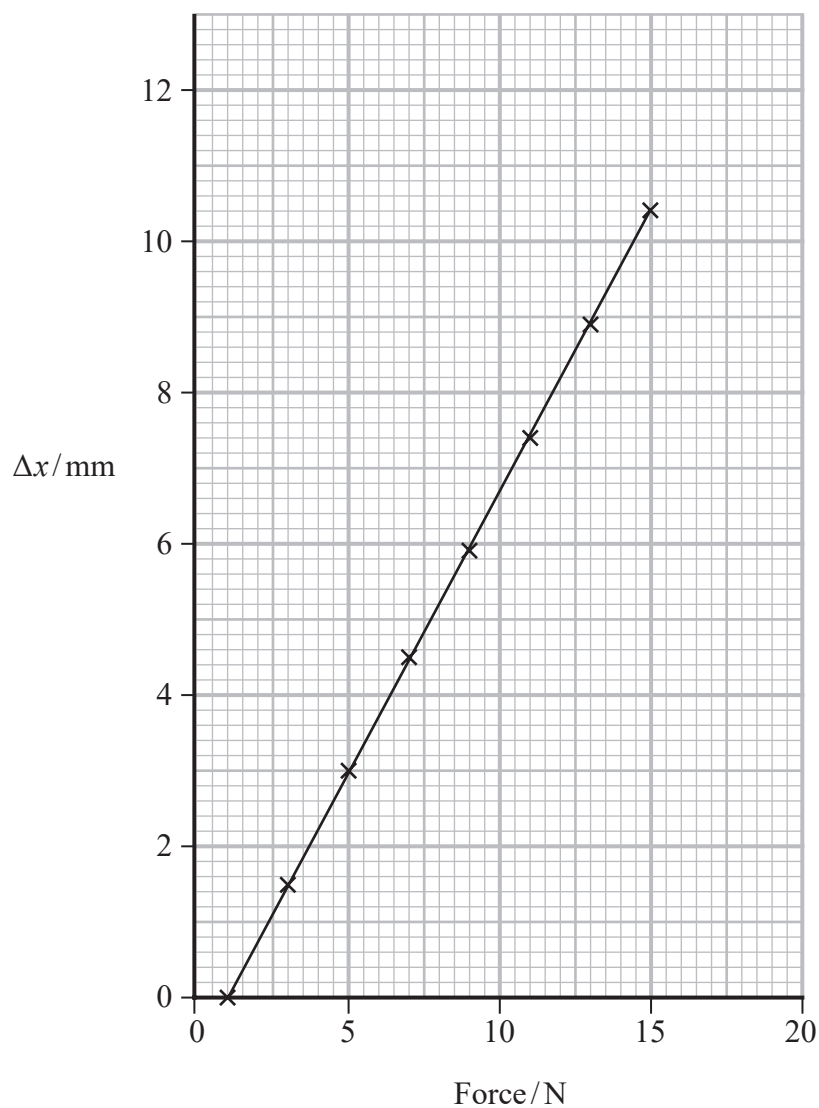
(2)

DO NOT WRITE IN THIS AREA



P 7 5 5 9 6 A 0 2 3 3 2

- (c) For each mass added, the student determined the force on the wire. The student plotted the graph shown.



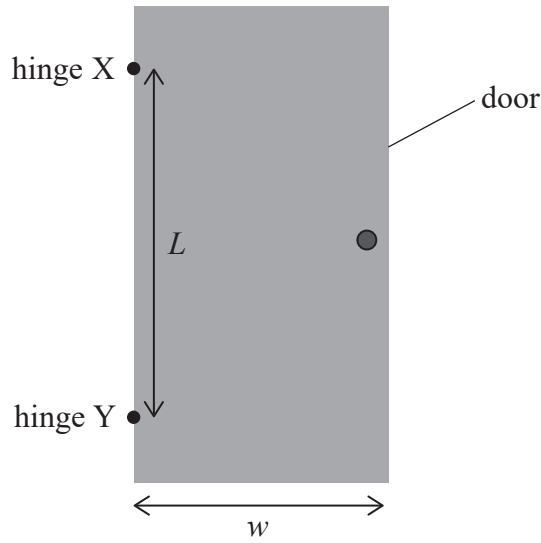
DO NOT WRITE IN THIS AREA

DO NOT WRITE IN THIS AREA

DO NOT WRITE IN THIS AREA



18 A uniform door of width w is supported by two hinges, X and Y. X and Y are a vertical distance L apart as shown.



(a) State the conditions needed for the door to be in equilibrium.

(2)

.....

.....

.....

.....

(b) Give the meaning of the term centre of gravity.

(1)

.....

.....

DO NOT WRITE IN THIS AREA

DO NOT WRITE IN THIS AREA

DO NOT WRITE IN THIS AREA

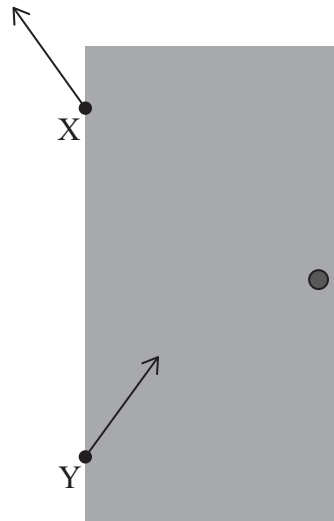


DO NOT WRITE IN THIS AREA

DO NOT WRITE IN THIS AREA

DO NOT WRITE IN THIS AREA

(c) The diagram shows the force acting on the door at each hinge.



Not to scale

The mass of the door is 14.4 kg.

The weight of the door causes a moment about each hinge.

(i) Show that the horizontal component of the force of hinge Y on the door is about 40 N.

$$L = 1.60 \text{ m}$$

$$w = 0.85 \text{ m}$$

(5)

.....

.....

.....

.....

.....

.....

.....

.....

.....

.....

.....

.....

.....

.....

.....

.....

.....

.....

.....

.....

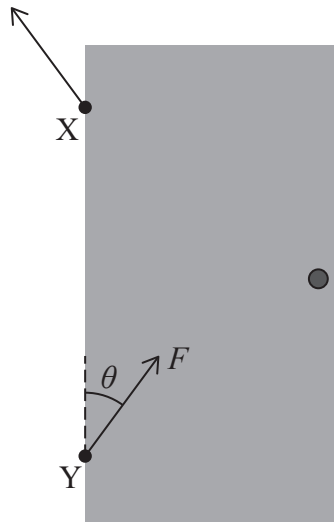
.....

.....



- (ii) The vertical component of the force of each hinge on the door is equal to half the weight of the door.

Hinge Y exerts a force F on the door at an angle θ to the vertical, as shown.



Not to scale

Determine the force F and the angle θ .

(4)

.....

.....

.....

.....

.....

.....

.....

$F =$

$\theta =$

DO NOT WRITE IN THIS AREA

DO NOT WRITE IN THIS AREA

DO NOT WRITE IN THIS AREA



(iii) An identical door is supported by hinges that are much closer together.

Explain how a smaller value of L affects F and θ .

You should consider moments about point X.

(4)

.....

.....

.....

.....

.....

.....

.....

.....

.....

.....

.....

.....

.....

.....

.....

.....

.....

.....

.....

.....

.....

.....

(Total for Question 18 = 16 marks)

TOTAL FOR SECTION B = 70 MARKS
TOTAL FOR PAPER = 80 MARKS

DO NOT WRITE IN THIS AREA



P 7 5 5 9 6 A 0 2 9 3 2

List of data, formulae and relationships

Acceleration of free fall $g = 9.81 \text{ m s}^{-2}$ (close to Earth's surface)

Gravitational field strength $g = 9.81 \text{ N kg}^{-1}$ (close to Earth's surface)

Unit 1

Mechanics

Kinematic equations of motion $s = \frac{(u + v)t}{2}$

$$v = u + at$$

$$s = ut + \frac{1}{2}at^2$$

$$v^2 = u^2 + 2as$$

Forces

$$\Sigma F = ma$$

$$g = \frac{F}{m}$$

$$W = mg$$

Momentum

$$p = mv$$

Moment of force

$$\text{moment} = Fx$$

Work and energy

$$\Delta W = F\Delta s$$

$$E_k = \frac{1}{2}mv^2$$

$$\Delta E_{\text{grav}} = mg\Delta h$$

Power

$$P = \frac{E}{t}$$

$$P = \frac{W}{t}$$

Efficiency

$$\text{efficiency} = \frac{\text{useful energy output}}{\text{total energy input}}$$

$$\text{efficiency} = \frac{\text{useful power output}}{\text{total power input}}$$

Materials

Density

$$\rho = \frac{m}{V}$$

Stokes' law

$$F = 6\pi\eta rv$$

Hooke's law

$$\Delta F = k\Delta x$$

Elastic strain energy

$$\Delta E_{\text{el}} = \frac{1}{2}F\Delta x$$

Young modulus

$$E = \frac{\sigma}{\varepsilon} \text{ where}$$

$$\text{Stress } \sigma = \frac{F}{A}$$

$$\text{Strain } \varepsilon = \frac{\Delta x}{x}$$

DO NOT WRITE IN THIS AREA

DO NOT WRITE IN THIS AREA

DO NOT WRITE IN THIS AREA



DO NOT WRITE IN THIS AREA

DO NOT WRITE IN THIS AREA

DO NOT WRITE IN THIS AREA

BLANK PAGE



P 7 5 5 9 6 A 0 3 1 3 2

DO NOT WRITE IN THIS AREA

DO NOT WRITE IN THIS AREA

DO NOT WRITE IN THIS AREA

BLANK PAGE

